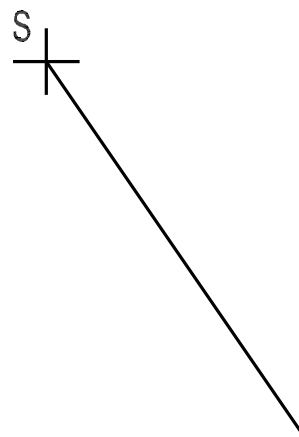
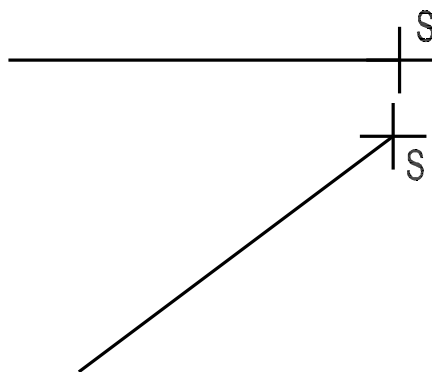
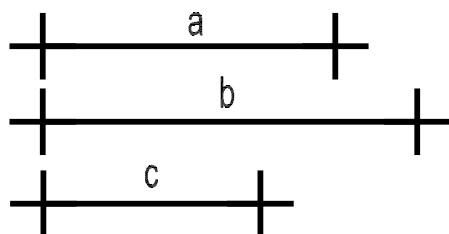


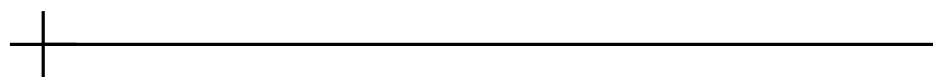
1. Traslada el segmento AB a las distintas posiciones S.



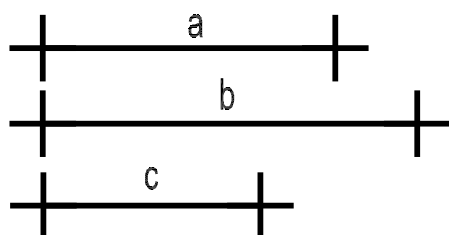
2. Suma los segmentos a, b y c.




$a+b+c$



3. Haz gráficamente la operación  $a+b-c$ .



$(a+b)-c$



CURSO:

APELLIDOS Y NOMBRE:

EJERCICIO N°:

FECHA:

ELEMENTOS SIMPLES 2

NOTA